

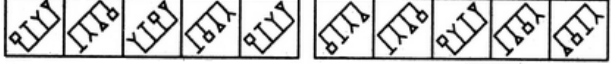
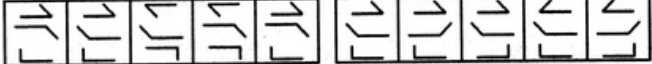


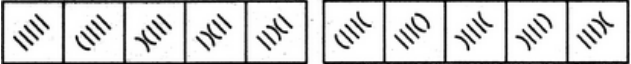

Question Type	Difficulty	Category, Sub Category	Question	Marks
Multiple Choice	Easy	Logical Reasoning	Pointing to a man, a woman said, "His mother is the only daughter of my mother." How is the woman related to the man? A. Sister B. Grand Mother C. Grandfather <b>D. Mother</b> E. None of these	1
Multiple Choice	Medium	Logical Reasoning	Look at this series: 12, 11, 13, 12, 14, 13, ... What number should come next?  A. 10 B. 16 C. 13 <b>D. 15</b>	1
Multiple Choice	Medium	Logical Reasoning	<b>Which word does NOT belong with the others?</b> A. index B. glossary C. chapter <b>D. book</b>	1
Multiple Choice	Easy	Logical Reasoning	<b>Which word does NOT belong with the others?</b> A. wing B. fin <b>C. beak</b> D. rudder	1

Multiple Choice	Easy	Logical Reasoning	<b>Paw : Cat :: Hoof : ?</b> A. Lamb <b>B. Horse</b> C. Elephant D. Tiger	1
Multiple Choice	Easy	Logical Reasoning	<b>Melt : Liquid :: Freeze :</b> A. Ice <b>B. Solid</b> C. Condense D. Push	1
Multiple Choice	Hard	Logical Reasoning	The Sharks and the Bears each finished with 34 points, and they are now battling it out in a five-minute overtime. A. When he is offered a better paying position, Jacob leaves the restaurant he manages to manage a new restaurant on the other side of town. B. Catherine is spending her junior year of college studying abroad in France. <b>C. Malcolm is readjusting to civilian life after two years of overseas military service.</b> D. After several miserable months, Sharon decides that she can no longer share an apartment with her roommate Hilary.	1
Multiple Choice	Hard	Logical Reasoning	Alert villagers nabbed a group of bandits armed with murderous weapons. Courses of action: I. The villagers should be provided sophisticated weapons. II. The villagers should be rewarded for their courage and unity. A. If only I follows <b>B. If only II follows</b> C. If either I or II follows	1

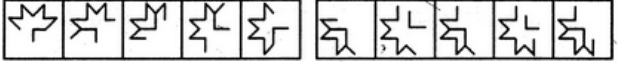
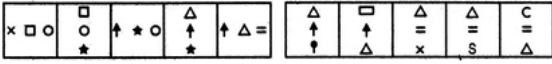
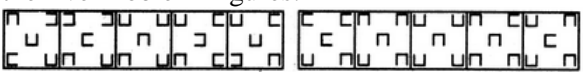
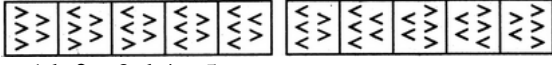

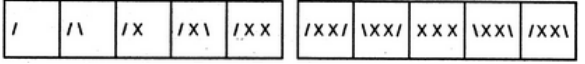
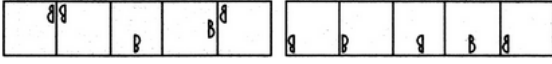

			D. If neither I nor II follows E. If both I and II follow	
Multiple Choice	Medium	Logical Reasoning	Look at this series: 7, 10, 8, 11, 9, 12, ... What number should come next? A. 7 B. 12 <b>C. 10</b> D. 13	1
Multiple Choice	Hard	Logical Reasoning	In these series, you will be looking at both the letter pattern and the number pattern. Fill the blank in the middle of the series or end of the series.  SCD, TEF, UGH, ____, WKL  A. CMN B. UJI <b>C. VIJ</b> D. IJT	1
Multiple Choice (Fill in the blanks)	Easy	Basic English	<b>When the Principal entered the class, a student..... on the blackboard.</b>  (a) Wrote <b>(b) was writing</b> (c) writes (d) is writing	1
Multiple Choice	Easy	Basic English	In each of the following questions, find the correctly spelt word.  1. Reannaisance 2. Renaissance 3. Rennaisance 4. Renaissance	1

			<p>a. 1</p> <p><b>b. 2</b></p> <p>c. 3</p> <p>d. 4</p>	
Multiple Choice	Easy	Basic English	<p>Select Correct Word</p> <p>A. Agressive</p> <p>B. Agressive</p> <p><b>C. Aggressive</b></p> <p>D. Aggressive</p>	1
Multiple Choice	Easy	Basic English	<p>Jawaharlal spent his childhood _____ Anand Bhawan.</p> <p><b>(A) at</b></p> <p>(B) in</p> <p>(C) on</p> <p>(D) across</p>	1
Multiple Choice	Easy	Basic English	<p>The boy was cured _____ typhoid.</p> <p>(A) from</p> <p><b>(B) of</b></p> <p>(C) for</p> <p>(D) through</p>	1

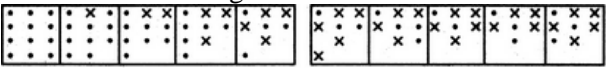
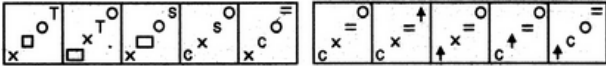
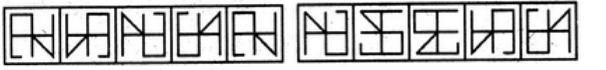

Multiple Choice	Medium	Basic English	Voracious..... (A) tenacious (B) truthful (C) spacious (D) <b>ravenous</b>	1
Multiple Choice	Medium	Basic English	Abortive..... (A) fruitful (B) familiar (C) <b>unsuccessful</b> (D) consuming	1
Multiple Choice	Medium	Basic English	Suguganya got —— as an officer in State bank of India.  A. appoint <b>B. appointed</b> C. appoints D. appointee	1
Multiple Choice	Medium	Basic English	They listened to him ——  A. spellbinded B. spellbind C. spellbinding <b>D. spellbound</b>	1
Multiple Choice	Medium	Basic English	Basis  A. bassis <b>B. bases</b> C. basises D. basium	1

Question No.	Question Type	Difficulty	Category, Sub Category	Question	Marks
1.	Single choice	Easy	Visualization	<p>Select a figure from amongst the Answer Figures which will continue the same series as established by the five Problem Figures.</p>  <p>a. 1 b.2 c.3 d.4 e 5</p>	1
2.	Single choice	Easy	Visualization	<p>Select a figure from amongst the Answer Figures which will continue the same series as established by the five Problem Figures.</p>  <p>a. 1 b.2 c.3 d.4 e 5</p>	1
3.	Single choice	Easy	Visualization	<p>Select a figure from amongst the Answer Figures which will continue the same series as established by the five Problem Figures.</p>  <p>a. 1 b.2 c.3 d.4 e 5</p>	1
4.	Single choice	Easy	Visualization	<p>Select a figure from amongst the Answer Figures which will continue the same series as established by the five Problem Figures.</p>  <p>a. 1 b.2 c.3 d.4 e 5</p>	1
5.	Single choice	Easy	Visualization	<p>Select a figure from amongst the Answer Figures which will continue the same series as established by the five Problem Figures.</p>  <p>a. 1 b.2 c.3 d.4 e 5</p>	1
6.	Single choice	Easy	Visualization	<p>Select a figure from amongst the Answer Figures which will continue the same series as established by the five Problem Figures.</p>  <p>a. 1 b.2 c.3 d.4 e 5</p>	1
7.	Single choice	Easy	Visualization	<p>Select a figure from amongst the Answer Figures which will continue the same series as established by the five Problem Figures.</p>	1



				 <p>a. 1 b.2 c.3 d.4 e 5</p>	
15.	Single choice	Easy	Visualization	<p>Select a figure from amongst the Answer Figures which will continue the same series as established by the five Problem Figures.</p>  <p>a. 1 b.2 c.3 d.4 e 5</p>	1
16.	Single choice	Easy	Visualization	<p>Select a figure from amongst the Answer Figures which will continue the same series as established by the five Problem Figures.</p>  <p>a. 1 b.2 c.3 d.4 e 5</p>	1
17.	Single choice	Easy	Visualization	<p>Select a figure from amongst the Answer Figures which will continue the same series as established by the five Problem Figures.</p>  <p>a. 1 b.2 c.3 d.4 e 5</p>	1
18.	Single choice	Easy	Visualization	<p>Select a figure from amongst the Answer Figures which will continue the same series as established by the five Problem Figures.</p>  <p>a. 1 b.2 c.3 d.4 e 5</p>	1
19.	Single choice	Easy	Visualization	<p>Select a figure from amongst the Answer Figures which will continue the same series as established by the five Problem Figures.</p>  <p>a. 1 b.2 c.3 d.4 e 5</p>	1
20.	Single choice	Easy	Visualization	<p>Select a figure from amongst the Answer Figures which will continue the same series as established by the five Problem Figures.</p>  <p>a. 1 b.2 c.3 d.4 e 5</p>	1
21.	Single choice	Easy	Visualization	<p>Select a figure from amongst the Answer Figures which will continue the same series as established by the five Problem Figures.</p> 	1



				a. 1 b.2 c.3 d.4 e 5	
22.	Single choice	Easy	Visualization	<p>Select a figure from amongst the Answer Figures which will continue the same series as established by the five Problem Figures.</p>  <p>a. 1 b.2 c.3 d.4 e 5</p>	1
23.	Single choice	Easy	Visualization	<p>Select a figure from amongst the Answer Figures which will continue the same series as established by the five Problem Figures.</p>  <p>a. 1 b.2 c.3 d.4 e 5</p>	1
24.	Single choice	Easy	Visualization	<p>Select a figure from amongst the Answer Figures which will continue the same series as established by the five Problem Figures.</p>  <p>a. 1 b.2 c.3 d.4 e 5</p>	1
25.	Single choice	Easy	Visualization	<p>Select a figure from amongst the Answer Figures which will continue the same series as established by the five Problem Figures.</p>  <p>a. 1 b.2 c.3 d.4 e 5</p>	1

Question No.	Question Type	Difficulty	Category, Sub Category	Question	Marks
1.	Single choice	Easy	Drawing test	Draw a fruit basket with fruit slate with pencil.	20

1.	Single choice	Easy	Environmental Awareness	While shedding, geckos will eat their skin in order to prevent predators from finding and eating them more easily. <b>a. True</b> b. False c. accurate d. none of the above	1
2.	Single choice	Easy	Environmental Awareness	There is a correlation between pulling an all-nighter and snapping out of depression. This is because the brain gets more active the longer it goes without sleep. <b>a. True</b> b. False c. accurate d. none of the above	1
3.	Single choice	Easy	Environmental Awareness	Videogames have been found to be more effective at battling depression than therapy. <b>a. True</b> b. False c. accurate d. none of the above	1
4.	Single choice	Easy	Environmental Awareness	Bi-weekly has two different definitions: Twice a week, or once every two weeks. <b>a. True</b> b. False c. accurate d. none of the above	1
5.	Single choice	Easy	Environmental Awareness	Mona Lisa was stolen from the Louvre in 1911, which drew more visitors to see the empty space than the actual painting. <b>a. True</b> b. False c. accurate d. none of the above	1
6.	Single choice	Easy	Environmental Awareness	Websters Dictionary accidentally had a word that didn't exist in it for five years – "Dord" <b>a. True</b> b. False c. accurate d. none of the above	1
7.	Single choice	Easy	Environmental Awareness	Amber colored rear turn signals are statistically proven to reduce collisions by about 28%. <b>a. True</b> b. False c. accurate d. none of the above	1
8.	Single choice	Easy	Environmental Awareness	The tallest mountain in our solar system, Olympic Mons, is 3 times taller than Mount Everest. <b>a. True</b> b. False c. accurate d. none of the above	1
9.	Single choice	Easy	Environmental Awareness	The Backpack Kid's real name is Russell Horning. <b>a. True</b> b. False c. accurate d. none of the above	1
10.	Single choice	Easy	Environmental Awareness	All the paint on the Eiffel Tower weighs the same as ten elephants. It gets repainted every seven years without closing to the public. <b>a. True</b> b. False c. accurate d. none of the above	1
11.	Single choice	Easy	Environmental Awareness	One of the most widely used symbols for medical assistance is actually the Swiss flag, and not a medical symbol. <b>a. True</b> b. False c. accurate d. none of the above	1

Question No.	Question Type	Difficulty	Category, Sub Category	Question	Marks
1.	Single choice	Easy	Design Sensitivity	An object drawn with a thicker line is perceived as: A. Foggy <b>B. Nearer</b> C. Moving	1
2.	Single choice	Easy	Design Sensitivity	A heavy object lying on a smooth flat ground needs to be moved to another place on the same flat ground. One could achieve this by pushing or pulling this object. Amongst the options below, choose the one that involves spending the least effort. A. Pushing <b>B. Pulling</b> C. Partially pulling and partially pushing D. None of the above	1
3.	Single choice	Easy	Design Sensitivity	The three basic shapes are: <b>A. Triangle, rectangle and circle</b> B. Triangle, cube and circle C. Triangle, cuboids and sphere D. Triangle, square and sphere	1
4.	Single choice	Easy	Design Sensitivity	Who is regarded as the Chief Architect of the Constitution of India? A. Mohandas Karamchand Gandhi B. Jawaharlal Nehru C. Rajendra Prasad <b>D. Bhimrao Ramji Ambedkar</b>	1
5.	Single choice	Easy	Design Sensitivity	Color has three distinct properties <b>A. Hue, value and saturation or intensity</b> B. Red, Blue, Green C. White, Black and Grey D. It depends	1
6.	Single choice	Easy	Design Sensitivity	What does the acronym CMYK used in printing stands for? A. Cyan, Magenta, Yellow, Khaki B. Color, Medium, Yellow, Kitsch <b>C. Cyan, Magenta, Yellow, Key (Black)</b> D. None of the above	1
7.	Single choice	Easy	Design Sensitivity	What are Secondary colors? A. Colors that are preferred less B. All colors that are not primary colors <b>C. Colors that are obtained by mixing two primary colors</b> D. None of the above	1
8.	Single choice	Easy	Design Sensitivity	What are the Primary colors? <b>A. Red, Blue, Yellow</b>	1

				B. Red, Yellow, Green C. White and Black D. Blue, Green, Yellow	
9.	Single choice	Easy	Design Sensitivity	The function of the circulatory system is to move ___ in human body a. food b. skin c. fluid <b>d. blood</b>	1
10.	Single choice	Easy	Design Sensitivity	The digestive system absorbs a. blood b. food <b>c. digestive juices</b> d. none of the above	1
11.	Single choice	Easy	Design Sensitivity	The function of heart is to pump a. food <b>b. blood</b> c. wastes d. none of the above	1
12.	Single choice	Easy	Design Sensitivity	The basic elements of design are <b>a. lines, circles etc</b> b. solid objects c. real objects d. none of the above	1
13.	Single choice	Easy	Design Sensitivity	What does 1.618 mean in design? a. golden ratio b. golden triangle c. common ratio d. none of the above	1
14.	Single choice	Easy	Design Sensitivity	What is the MOST common rule of thumb measure for setting work height when standing? a. Hip height b. Chest height <b>c. Elbow height</b> d. 100 cm (40 in)	1
15.	Single choice	Easy	Design Sensitivity	A worker has a lifting related injury. Which of the following is LEAST likely to have occurred? a. Damage to the erector spinae muscles b. Compression damage to the intervertebral disc c. Herniated disc <b>d. Damage to the shoulder rotator cuff</b>	1
16.	Single choice	Easy	Design Sensitivity	If, $9 + 8$ means 9 is the child of 8, and $7 * 6$ means that 6 is the wife of 7, then which of the following statements can be derived from $2 + 3 * 1 + 4 * 5$ ? <b>A. 2 is the grandchild of 4</b> B. 1 is the daughter of 4 C. 2 is the so of 8 D. all of the above	1
17.	Single choice	Easy	Design Sensitivity	Which of the following words are similar in meaning to scribble? A. freesbie <b>B. Doodle</b> C. Nibble D. Feeble	1
18.	Single choice	Easy	Design Sensitivity	Which is harmful to human body <b>a. Poison</b> b. milk c. water d. none of the above	1
19.	Single choice	Easy	Design Sensitivity	In which of the following applications is a convex lens used? <b>A. Peepholes</b> B. gear box C. Micromirror D. None of the above	1

20.	Single choice	Easy	Design Sensitivity	<p>Read the following lines and answer the question given below:  Pleading farts and ponderous burps Upset the silence of dignified insides, Sounds of occupation and exile.  What makes up dignified insides?  <b>A. Stomach</b>  B. Country  C. Silence  D. Circus</p>	1
21.	Single choice	Easy	Design Sensitivity	<p>Which of the following crawl on a surface?  A. Helicopters  <b>B. Words</b>  C. Fruits  D. Satellites</p>	1
22.	Single choice	Easy	Design Sensitivity	<p>Which is a flying object  a. Car  <b>b. Drone</b>  c. bicycle  d. Scooter</p>	1
23.	Single choice	Easy	Design Sensitivity	<p>What is use as fuel in Aircraft  a. Kerosence b. Pertrol c. Diesel <b>d. Aviation fuel</b></p>	1
24.	Single choice	Easy	Design Sensitivity	<p>What can be used for drawing circles?  a. divider  b. ruler  c. pencil  <b>d. all of the above</b></p>	1
25.	Single choice	Easy	Design Sensitivity	<p>Dividers have  <b>a. two sharp edges</b>  b. one sharp edge  c. three sharp edges  d. no sharp edges</p>	1